

Name: _____

Teacher: _____


Grade & Section: _____

Date: _____


4

Multiplication


Find the product of the numbers below. Write your answer in the space below each problem.




$4 \times 1 = \underline{\quad}$




$4 \times 2 = \underline{\quad}$



$4 \times 3 = \underline{\quad}$



$4 \times 4 = \underline{\quad}$



$4 \times 5 = \underline{\quad}$



$4 \times 6 = \underline{\quad}$




Name: _____

Date: _____


4

Matching Multiplication

Draw a line to match the problems to their answers below.




$4 \times 1 =$



$4 \times 2 =$



$4 \times 3 =$



$4 \times 4 =$



$4 \times 5 =$



12



8



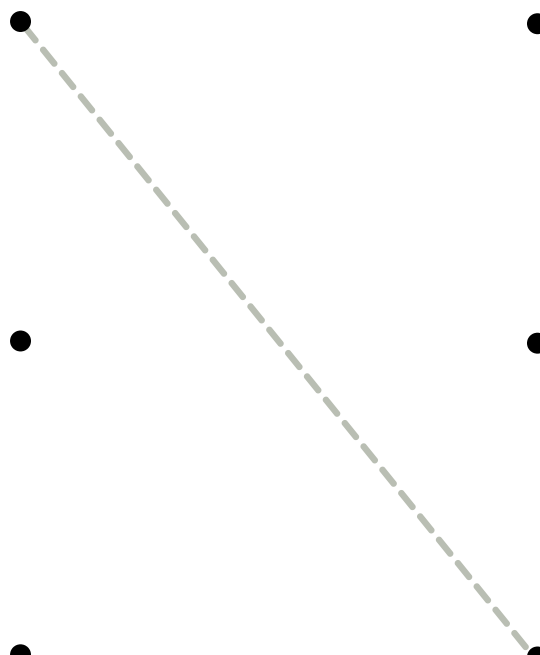
4



20



16




Name: _____

Date: _____

4 Matching Multiplication


Draw a line to match the problems to their answers below.



$4 \times 1 =$



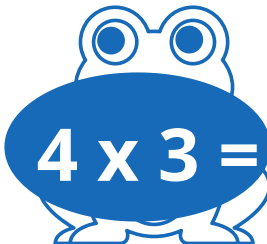
$6 + 6$



$4 \times 2 =$




$6 + 3$




$4 \times 3 =$




$3 + 1$



$4 \times 4 =$



$8 + 8$



$4 \times 5 =$



$15 + 5$

4


Name _____

Teacher _____

Class _____

Date _____

Time to do Multiplication !



$$\begin{array}{r} 4 \\ \times 1 \\ \hline \end{array}$$

$$\begin{array}{r} 4 \\ \times 3 \\ \hline \end{array}$$

$$\begin{array}{r} 4 \\ \times 3 \\ \hline \end{array}$$

$$\begin{array}{r} 4 \\ \times 2 \\ \hline \end{array}$$

$$\begin{array}{r} 4 \\ \times 5 \\ \hline \end{array}$$

$$\begin{array}{r} 4 \\ \times 6 \\ \hline \end{array}$$

$$\begin{array}{r} 4 \\ \times 7 \\ \hline \end{array}$$

$$\begin{array}{r} 4 \\ \times 8 \\ \hline \end{array}$$

$$\begin{array}{r} 4 \\ \times 9 \\ \hline \end{array}$$

$$\begin{array}{r} 4 \\ \times 10 \\ \hline \end{array}$$

$$\begin{array}{r} 4 \\ \times 11 \\ \hline \end{array}$$

$$\begin{array}{r} 4 \\ \times 12 \\ \hline \end{array}$$

$$\begin{array}{r} 4 \\ \times 13 \\ \hline \end{array}$$


$$\begin{array}{r} 4 \\ \times 14 \\ \hline \end{array}$$

$$\begin{array}{r} 4 \\ \times 15 \\ \hline \end{array}$$

$$\begin{array}{r} 4 \\ \times 16 \\ \hline \end{array}$$

4

Multiplication with fun



Student's Name _____

Year & Section _____

LET'S MAKE MULTIPLICATION FUN!

Solve the equations and write the correct answers in the bubbles.

$4 \times 1 =$

$4 \times 2 =$

$4 \times 3 =$

$4 \times 4 =$

$4 \times 5 =$

$4 \times 6 =$

$4 \times 7 =$

$4 \times 8 =$

$4 \times 9 =$


$4 \times 10 =$

$4 \times 11 =$

$4 \times 12 =$

4

Multiplication



Find the product of the numbers below

Name: _____

Date: _____

Section: _____

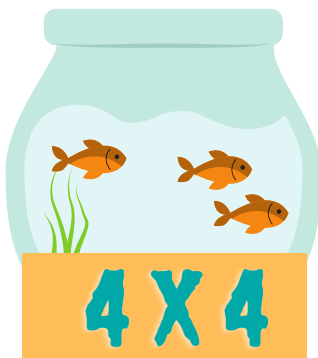
Score: _____

Solve the problems listed below and fill in the correct answer in the spaces provided.

1.



2.




3.



4

MULTIPLICATION

HAVE FUN LEARNING HOW TO MULTIPLY



Name

Section

Date

Score

Instructions: Solve the equation and fill in the answer.

1.) $4 \times 3 = \underline{\quad}$

4.) $4 \times 2 = \underline{\quad}$

2.) $4 \times 4 = \underline{\quad}$

5.) $4 \times 6 = \underline{\quad}$

3.) $4 \times 7 = \underline{\quad}$

6.) $4 \times 9 = \underline{\quad}$

NAME


DATE

CLASS

SCORE

4

Multiplication



LET'S MULTIPLY

Solve the multiplication equations and write the correct answers in the circles.

4×3

4×2

4×5

4×7

4×8

4×1

4×1

4×1

4×3

4×11

4×7

4×10

